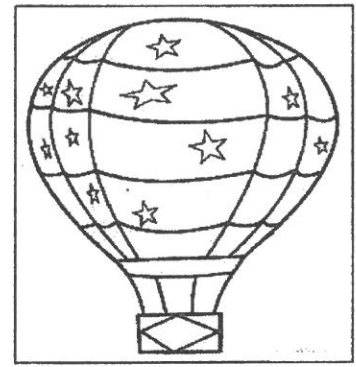

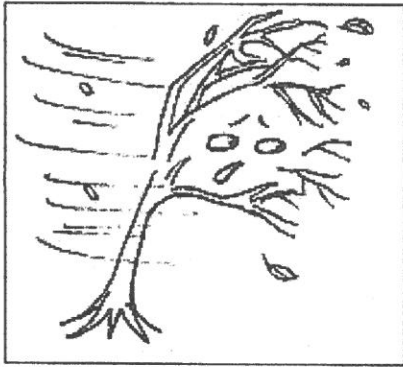


**INDIAN SCHOOL MUSCAT-GHUBRAH  
PRIMARY SECTION**

<b>Subject : EVS</b>	<b>Semester II</b>	<b>Name :</b>
<b>Topic : Air</b>		<b>Std. I Sec :</b>
<b>Practice Worksheet No. 5</b>		<b>Date :</b>
<b>Resource Person : Ms. Dhanalakshmi</b>		<b>Teacher's Signature :</b>

**I. Identify the pictures using the help box given below.**

windmill      hot air balloon      storm



**II. Match the following.**

- |                       |                |
|-----------------------|----------------|
| a. moving air         | i. breathe air |
| b. gentle wind        | ii. wind       |
| c. animals and plants | iii. clean air |
| d. plant more trees   | iv. breeze     |

a. \_\_\_\_\_      b. \_\_\_\_\_      c. \_\_\_\_\_      d. \_\_\_\_\_

**III. Circle the correct answer.**

- a. Which of the following is required for good health?
- a. dust              b. fresh and clean air              c. smoke
- b. Which of the following makes air unclean?
- a. stars              b. smoke              c. trees